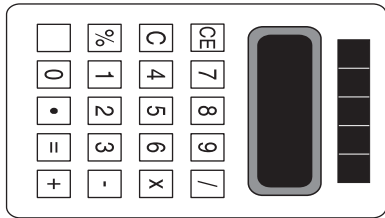
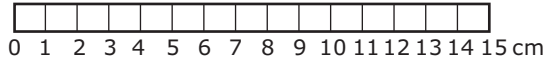


1 How long is the calculator?



\_\_\_\_\_ cm

2 Write the answer in each blank.

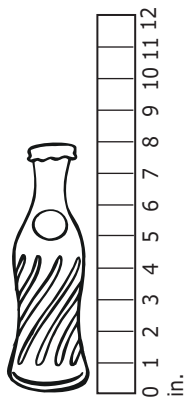
Of these numbers

711      493      108      536

\_\_\_\_\_ is the smallest

\_\_\_\_\_ is the largest

3 What is the height of the bottle?



\_\_\_\_\_ in.

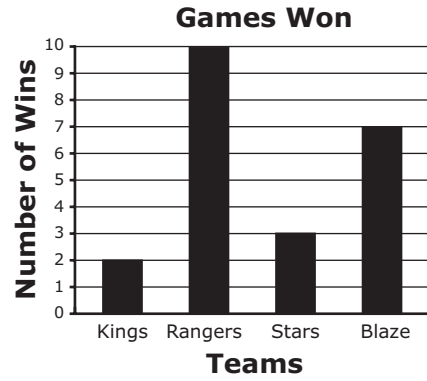
4 Adam drew 11 birds and Joe drew 7 birds. How many birds did Adam and Joe draw in all?

\_\_\_\_\_

5 Write the answer in the blank.

$9 + 3 + 14 = \underline{\hspace{2cm}}$

6 Use the graph to answer the questions.



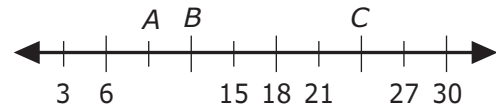
How many games did the Stars win?

\_\_\_\_\_

7 Write + or - in the blank.

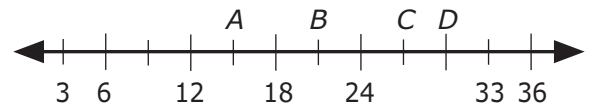
$15 \underline{\hspace{1cm}} 7 = 22$

8



What number does A stand for?

\_\_\_\_\_



What number does B stand for?

\_\_\_\_\_

**9** Counting by 4s, fill in the blanks.  
 24, 28, 32, \_\_\_\_\_ , \_\_\_\_\_

**10** A bag contains 10 bagels. Two of them are eaten. How many bagels are left in the bag?  
 \_\_\_\_\_

**11** How much money is pictured below?



\_\_\_\_\_ ¢

**12** Write the answer in each blank.  
 Of these numbers  
 187    196    149    150  
 187 is greater than \_\_\_\_\_ and \_\_\_\_\_

**13** Write the time.



\_\_\_\_\_ : \_\_\_\_\_

**14** Starting with the number 0 and counting left to right,

0	2	4	6	8	10	12
14	16	18	20	22	24	26
28	30	32	34	36	38	40

write the fourth number \_\_\_\_\_

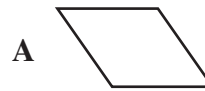
write the ninth number \_\_\_\_\_

write the third number \_\_\_\_\_

**15** Write + or - in the blank.


59 \_\_\_\_\_ 13 = 46

**16** Which shape below is a rectangle?



\_\_\_\_\_

**17** What fraction of the boxes is shaded?  
 Write the fraction in the blank.



\_\_\_\_\_

- 18** Fill in the blanks.

726 = \_\_\_\_ hundreds \_\_\_\_ tens \_\_\_\_ ones

- 19** How much money is pictured below?



\$ \_\_\_\_\_

- 20** Write “less” or “greater” in the blank.

597 is \_\_\_\_\_ than 841

- 21** Starting with the letter A and counting left to right,

A	B	C	D	E
F	G	H	I	J
K	L	M	N	O

write the third letter \_\_\_\_\_

write the sixth letter \_\_\_\_\_

write the eighth letter \_\_\_\_\_

- 22** Fill in the blanks.

873 = \_\_\_\_ hundreds \_\_\_\_ tens \_\_\_\_ ones

- 23** It took Carla 15 minutes to walk to school. It took Ken 25 minutes to walk to school. How many more minutes did it take Ken to walk to school than Carla?

\_\_\_\_\_


- 24** Write the answer in the blank.

\_\_\_\_\_ = Three hundreds three tens two ones

- 25** Alex has 12 pieces of candy and Melinda has 18 pieces of candy. How many more pieces of candy does Melinda have than Alex?

\_\_\_\_\_

- 26** Write the time.



\_\_\_\_\_ : \_\_\_\_\_

- 27** Ken has 16 slices of pizza to share equally among 8 classmates. How many slices of pizza will each classmate get?

\_\_\_\_\_

- 28** What fraction of the stars is shaded?  
Write the fraction in the blank.



\_\_\_\_\_

- 29** Write the answer in the blank.

What number is 190 more than 250?

\_\_\_\_\_

*Reminder:* There is **no** partial credit when scoring. The answer must be correct **in its entirety** to obtain the correct score value. If any part of a multi-part question is incorrect, the score is zero.

### Grade 2, Probe 33 Answer Key

Item No.	Answer	Correct	Incorrect
1.	12	1	0
2.	108, 711	1	0
3.	8	1	0
4.	18	1	0
5.	26	1	0
6.	3	1	0
7.	+	1	0
8.	9, 21	2	0
9.	36, 40	1	0
10.	8	1	0
11.	55	1	0
12.	149, 150	1	0
13.	2, 00	1	0
14.	6, 16, 4	2	0
15.	-	1	0
16.	B	3	0
17.	$\frac{6}{12}$ or $\frac{1}{2}$	2	0
18.	7, 2, 6	2	0
19.	1.95	2	0
20.	less	1	0
21.	C, F, H	2	0
22.	8, 7, 3	1	0
23.	10	2	0
24.	332	1	0
25.	6	2	0
26.	1, 30	2	0
27.	2	3	0
28.	$\frac{7}{15}$	2	0
29.	440	3	0

Total